

Ai Tong School
P4 Mathematics
2024 Term 1 Review

Name: _____ ()

Class: 4 _____

Date: _____

Marks: _____ /35

Duration: 50 minutes

Parent's Signature: _____

Section A


Questions 1 to 10 carry 2 marks each. Show your working clearly in the space provided for each question and write your answers in the spaces provided.

For questions which require units, give your answers in the units stated. (20 marks)

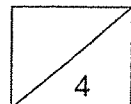
- 1 Write the number:
Fifty thousand, eight hundred and three.

Ans: _____

- 2 Use all the digits below to form the smallest 4-digit number.



Ans: _____



3 Complete the number pattern.

74 603, 73 603, _____, 71 603, 70 603, _____

4 Arrange the numbers in increasing order.

39 039	40 390	40 309	39 309
--------	--------	--------	--------

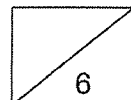
Ans: _____, _____, _____, _____
(smallest)

5a Round 74 945 to the nearest ten.

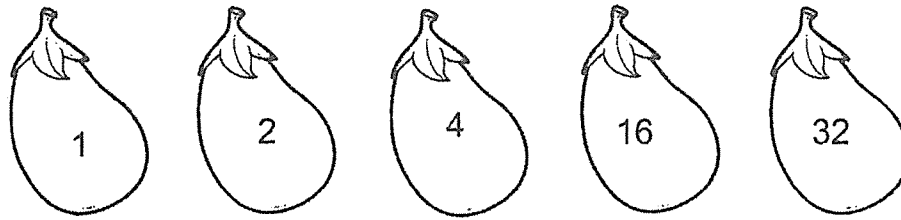
74 945 \approx _____

5b Round 74 945 to the nearest hundred

74 945 \approx _____



- 6 Peter listed the factors of 32 below.



He missed out one factor. What is the missing factor?

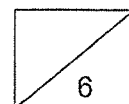
Ans: _____

- 7 Circle the common multiples of 3 and 9.



- 8 A given number is a multiple of 7.
The number is between 50 and 60
What is the number?

Ans: _____



9 Arrange these fractions from the greatest to the smallest.

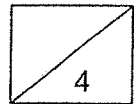
$$\frac{2}{3}, \frac{5}{6}, \frac{2}{5}$$

Ans: _____, _____, _____
(greatest)

10 Find the value of $\frac{11}{12} - \frac{1}{4}$.

Give your answer in its simplest form.

Ans: _____



Section B

For questions 11 to 14, show your working clearly in the space provided for each question and write the answers in the spaces provided. The number of marks available is shown in the brackets [] at the end of each question or part-question. (15 marks)

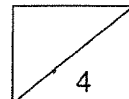
- 11 A shop had 162 boxes of mangoes.
Each box had 36 mangoes.

(a) How many mangoes were there?

Ans: _____ [2]

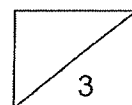
- (b) The shop sold 738 mangoes.
The rest of the mangoes were packed into bags of 9.
How many bags of mangoes were packed?

Ans: _____ [2]



- 12 Sam had some game cards at first.
He gave 238 cards to his brother.
Then he received 648 new cards from his father.
Sam had 1330 cards in the end.
How many game cards did he have at first?

Ans: _____ [3]



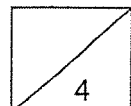
- 13 School A has 3064 story books in its library.
School B has 4 times as many books as School A.

(a) How many more story books does School B have than School A?

Ans: _____ [2]

(b) How many story books must be moved from School B to School A so that there will be the same number of books in both schools?

Ans: _____ [2]



14 A green bulb blinks every 4 minutes, and a red bulb blinks every 6 minutes.

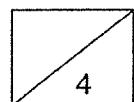
(a) How many times will the red bulb blink in 48 minutes?

Ans: _____ [2]

(b) The two light bulbs blink together at 8.00 p.m. for the first time.
At what time will the two bulbs blink together for the second time?

Ans: _____ [2]

End of Paper
--- CHECK YOUR WORK CAREFULLY ---



SCHOOL : AITONG SCHOOL
 LEVEL : PRIMARY 4
 SUBJECT : MATH
 TERM : 2024 WA1

Q1)	50803
Q2)	5089
Q3)	72603 , 69603
Q4)	39093, 39309, 40309, 40390
Q5)	a)74950 b)74900
Q6)	8
Q7)	18 , 27
Q8)	56
Q9)	$\frac{5}{6}$, $\frac{2}{3}$, $\frac{2}{5}$
Q10)	$\frac{2}{3}$
Q11)	a)162 x 36 = 5832 b)5832 – 738 = 5094 5094 ÷ 9 = 566
Q12)	1330 – 648 = 682 682 + 238 = 920
Q13)	a)1u = 3064 3u = 3064 x 3 = 9192 b)3064 ÷ 2 = 1532 3064 + 1532 = 4596
Q14)	a)48 ÷ 6 = 8 b)4 : 4 , 8 , (12) 6 : 6, ((12) ANS: 8.12 pm

