

HENRY PARK PRIMARY SCHOOL
2023 WEIGHTED ASSESSMENT 1
MATHEMATICS
PRIMARY 3

Name: _____ ()

Parent's Signature:


Class: Primary 3 _____

Date: _____

Duration of Paper: 40 min

Marks:

Section 1: Open-Ended	18
Section 2: Problem Sums	7
Total	25



Section 1: Open-Ended Questions (18 marks)

Questions 1 to 9 carry 2 marks each. Write your answers in the spaces provided.

1. Find the value of 4 thousands + 3 tens + 8 ones.

2. Find the difference between 869 and 5182.

3. Write 3405¢ in dollars and cents.

4. Find the product of 6 and 9.

5. Find the quotient and remainder of $625 \div 7$.

R

6. Arrange the following numbers in increasing order.

6290 , 7158 , 3624 , 6239

--	--	--	--

7. Aileen bought some sweets for her friends. She packed the sweets into 8 packets. There were 6 sweets in each packet. After packing, she was left with 4 sweets. How many sweets did she buy?

--

8. What do A and B represent?

$$\begin{array}{r} 12\boxed{B} \\ 4 \overline{) \boxed{A} 08} \\ \underline{- 4} \\ 10 \\ \underline{- 8} \\ 28 \\ \underline{- 28} \\ 0 \end{array}$$

A is _____.

B is _____.



9. Thomas made a different number of paper planes each day. On the first day, he made 6 paper planes. For each subsequent day, he made twice as many paper planes as he did the day before. How many paper planes would he make on the third day?

--

Section 2: Problem Sums (7 marks)

Read the problem sums carefully before solving it. Show your working clearly and write your answers in the space provided. The number of marks available is shown in brackets [] at the end of each question or part-question.

10. A pair of shoes cost \$125.80. A blouse cost \$49.50.



(a) How much more does the pair of shoes cost than the blouse? [2m]

Working

Ans: _____

(b) Sarah bought the pair of shoes. She gave the cashier \$150.
How much change should she receive? [2m]


Ans: _____

11. On Sunday, a baker sold 2961 banana muffins. He sold 584 fewer banana muffins than chocolate muffins that day. How many muffins did he sell altogether on Sunday? [3m]

Working

Ans: _____

- END OF PAPER -



YEAR : 2023
 LEVEL : PRIMARY 3
 SCHOOL : HENRY PARK PRIMARY SCHOOL
 SUBJECT : MATHEMATICS
 TERM : WEIGHTED ASSESSMENT 1

Q1	4038	Q2	4313
Q3	\$34.05	Q4	54
Q5	89R 2	Q6	3624, 6239, 6290, 7158
Q7	$8 \times 6 = 48$ $48 + 4 = 52$	Q8	A is 5 B is 7
Q9	$6 \times 2 = 12$ $12 \times 2 = 24$	Q10	(a) $125.80 - 49.50 = \$76.30$ (b) $\$150 - \$125.80 = \$24.20$
Q11	$2961 + 584 = 3545$ $3545 + 2961 = 6506$		

