



**Maha Bodhi School**  
**2022 Topical Review 3**  
**Primary 1 Mathematics**

Name: \_\_\_\_\_ (    )

Class: Primary 1 \_\_\_\_\_

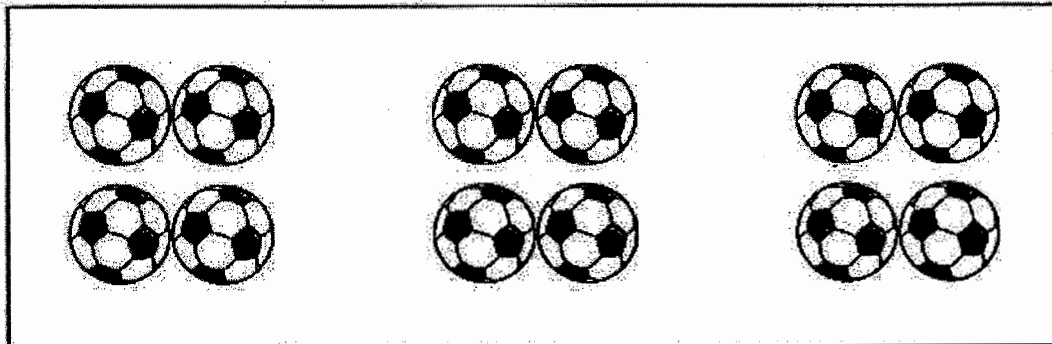
Duration: 30 minutes

Date: \_\_\_\_\_

Parent's Signature: \_\_\_\_\_

Write your answers in the spaces provided.

1. Study the picture below.




There are \_\_\_\_\_ groups of 4 balls.

2. Fill in the blank with the correct answer.

$$2 \times 6 = \underline{\hspace{2cm}}$$

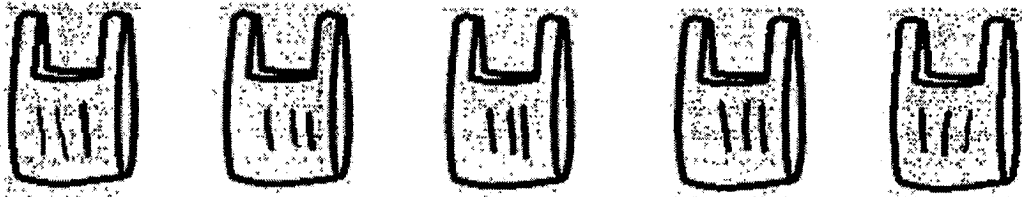

3.  $7 + 7 + 7 + 7 + 7 = \underline{\hspace{1cm}}$  sevens

4. There are 16 stamps.  
Circle groups of 8.




There are \_\_\_\_\_ groups of 8.

5. Sarah has 15 apples.  
She puts an equal number of apples in each bag.




There are \_\_\_\_\_ apples in each bag.

6. Write the time shown on the clock.



It is \_\_\_\_\_.

7. Tick (✓) the correct answer 'am' or 'pm' in the box.



Samy had his breakfast at 7.00


am	<input type="checkbox"/>
pm	<input type="checkbox"/>

8. Complete the equation with '+', '-' or 'x'.



$$3 \bigcirc 3 = 9$$

9. Sue has 6 packets of sweets. There are 5 sweets in each packet.  
How many sweets are there altogether?



Write a multiplication equation to show the answer.

$$\square \times \square = \square$$

10. Mrs Tan bought 20 slices of cake.  
She packed 2 slices of cake into each box.  
How many boxes did she use?




She used \_\_\_\_\_ boxes.

11. John has 16 stickers.

He gives the stickers to 4 friends to share equally.

How many stickers does each friend get?




Each friend gets \_\_\_\_\_ stickers.

12. There are 18 candles on Meiling's birthday cake.

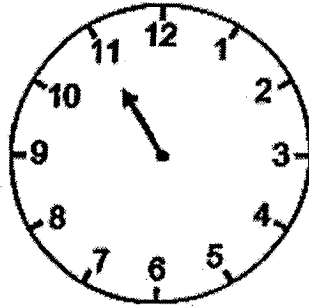
The candles are placed equally in 3 rows.

How many candles are there in each row?



There are \_\_\_\_\_ candles in each row.

13. Draw the missing minute hand to show 11 o'clock.




14. Read Lily's daily timetable.

How long does she spend doing her homework?

Time	Activity
2:00 pm to 2:30 pm	Lunch
2:30 pm to 3:45 pm	Shower
3:45 pm to 4:45 pm	Homework
4:45 pm to 5:15 pm	Read

Lily spends \_\_\_\_\_ doing her homework.

15. Max played at the playground for half an hour.  
He stopped playing at 6:00 pm.  
At what time did he start playing at the playground?



Max started playing at the playground at \_\_\_\_\_.

----- The End -----



**Remember to check your work!**






**SCHOOL : MAHA BODHI PRIMARY SCHOOL**  
**LEVEL : PRIMARY 1**  
**SUBJECT : MATH**  
**TERM : Review 3 2022**

1) There are 3 groups of 4 balls.

2)  $2 \times 6 = 12$

3)  $7 + 7 + 7 + 7 + 7 = 5 \text{ sevens}$

4)



There are 2 groups of 8

5) There are 3 apples in each bag.


6) It is 2 : 30

7) am

8)  $3 \times 3 = 9$


9)  $6 \times 5 = 30$

10)




She used 10 boxes.

11)



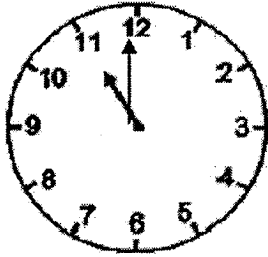
Each friend gets 4 stickers

12)



There are 6 candles in each row.

13)



14) Lily spends 1 hour doing her homework

15) Max started playing at the playground at 5:30pm.

