



Maha Bodhi School
2022 Topical Review 2
Primary 1 Mathematics

Name: _____ ()

Class: Primary 1 _____


Duration: 30 minutes

Date: _____

Parent's Signature: _____

Write your answers in the spaces provided.

1. Count the flowers in the box below.



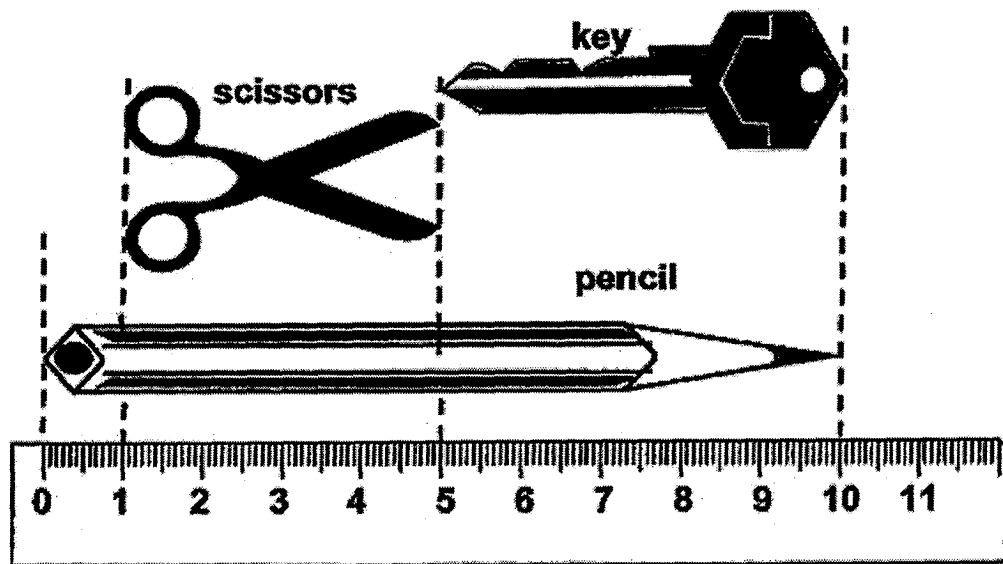
There are flowers altogether.

2. Write the number in words.

57	
----	--

3. $6 + 5 + 7 =$

Look at the objects below and answer questions 4 and 5.



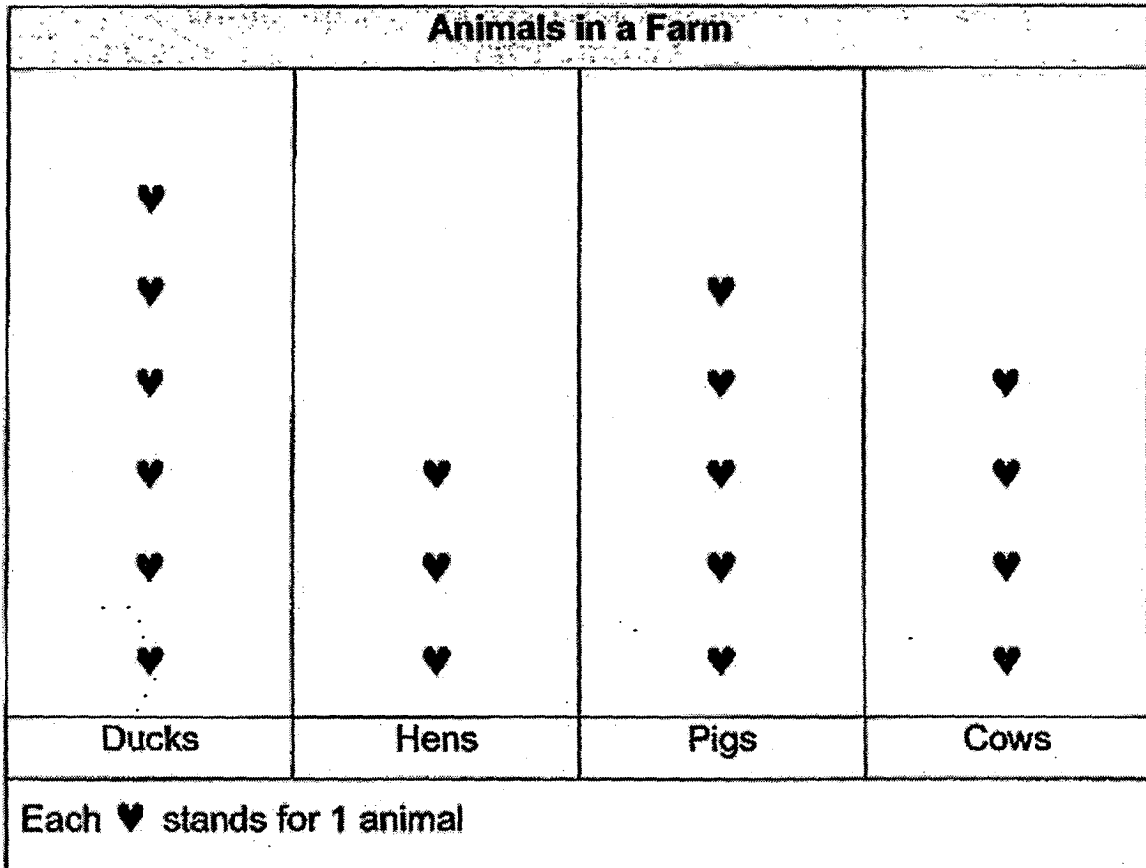
4. The pair of scissors is _____ cm long.

5. The _____ is the longest object.

6. Subtract

Tens	Ones
5	0
- 3	1

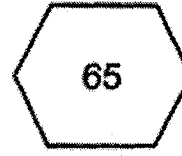
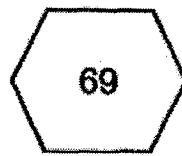
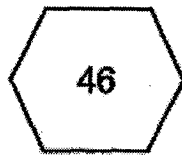
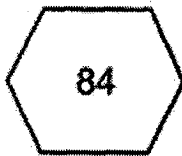
The picture graph shows the number of animals in a farm.
Use it to answer questions 7 and 8.



7. There are pigs in the farm.

8. There are fewer cows than ducks.

9. Arrange the numbers in order. Begin with the **biggest** number.



_____ , _____ , _____ , _____
biggest

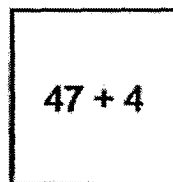
10. Write the missing number in the number pattern below.



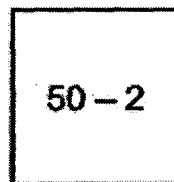
11. Anna and Betty are playing a Math game.

The person with the bigger number as the answer is the winner.

Look at their cards. Who is the winner?



Anna

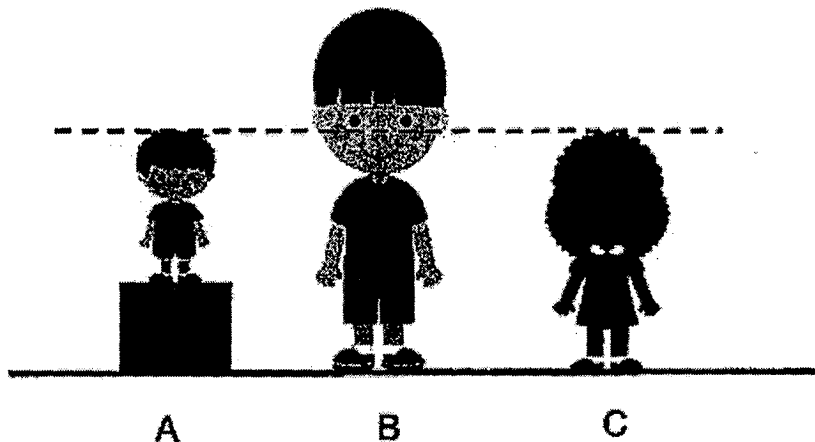


Betty

_____ is the winner

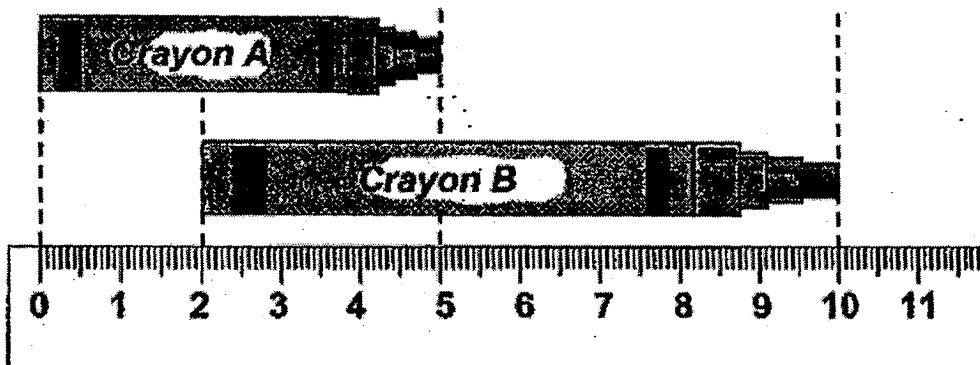
12. $25 + \boxed{} = 89$

13. Arrange the people from the tallest to the shortest.



, ,
tallest

14.



Crayon B is _____ cm longer than Crayon A.

15. James buys 9 toy cars.

Tom buys 25 toy cars.

How many more toy cars does Tom buy than James?

$$\square \bigcirc \square = \square$$

Tom buys _____ more toy cars than James.

----- The End -----



Remember to check your work!

SCHOOL : MAHA BODHI PRIMARY SCHOOL
LEVEL : PRIMARY 1
SUBJECT : MATH
TERM : Review 2 2022

- 1) There are 32 flowers altogether.
- 2) Fifty-seven
- 3) $6 + 5 + 7 = 18$
- 4) The pair of scissors is 4 cm long.
- 5) The pencil is the longest object.
- 6) 19
- 7) There are 5 pigs in the farm.
- 8) There are 2 fewer cows than ducks.
- 9) 84, 69, 65, 46
- 10) 25
- 11) Anna is the winner
- 12) $25 + 64 = 89$
- 13) B, C, A
- 14) Crayon B is 3 cm longer than Crayon A.
- 15) $25 - 9 = 16$
Tom buys 16 more toy cars than James.

