



Maha Bodhi School
2022 Topical Review 1
Primary 1 Mathematics

Name: _____ ()

Class: Primary 1 _____

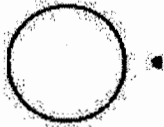
Duration: 30 minutes

Date: _____

Parent's Signature: _____

Write your answers in the spaces provided.

1. Draw lines to match each shape to its name.



• triangle

• circle

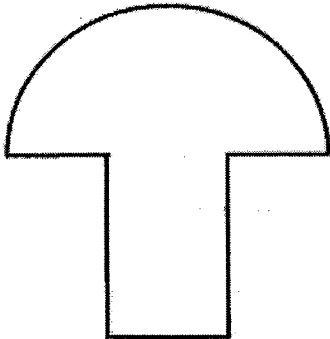
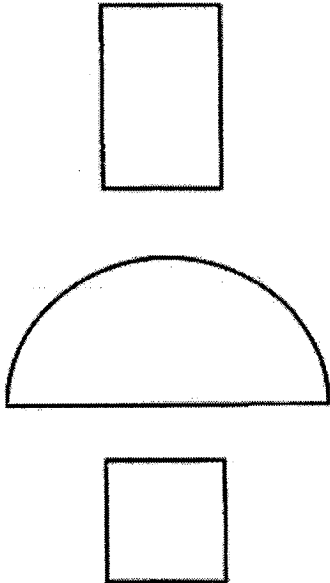
• rectangle

2. Circle the 5th watermelon from the right.



Right

3. Look at the figure on the left.
Circle the two shapes on the right that formed it.

Figure	Circle the correct two shapes
	

4. Write the number word.

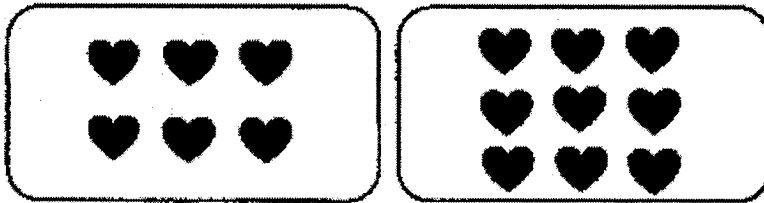
20	
----	--

5. Complete the number pattern.



6. Complete the addition equation.

How many hearts are there altogether?

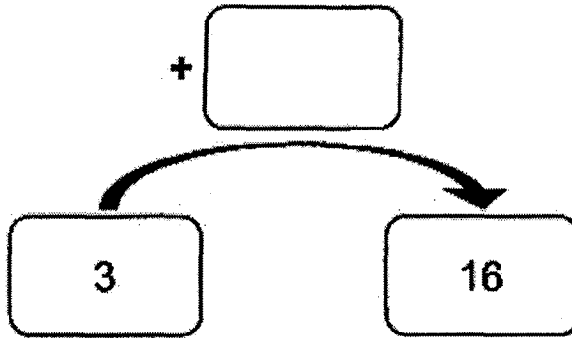


$$\boxed{} \bigcirc \boxed{} = \boxed{}$$

7. Complete the subtraction equation.

$$\boxed{12} \ominus \boxed{5} = \boxed{}$$


8. Write the missing number in the box.



9. Complete the addition story.

Joe has 7 white balloons.

May has 4 black balloons.




They have balloons altogether.

10. Complete the subtraction equation.

There are 18 burgers.

The children ate 8 burgers.

How many burgers are left?



$$\square - \square = \square$$

There are burgers left.

11. Arrange the numbers in order.




Begin with the smallest number.



Smallest

12.



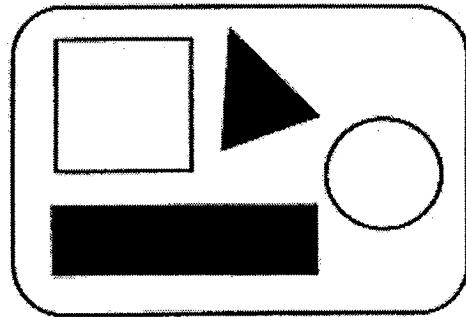
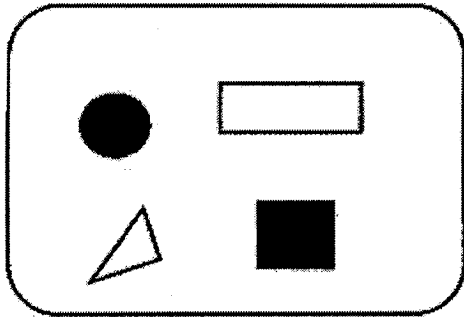
There are fewer  than .

13. There are 9 trees planted in a row.

Circle the tree that is at the same position from the left and right.

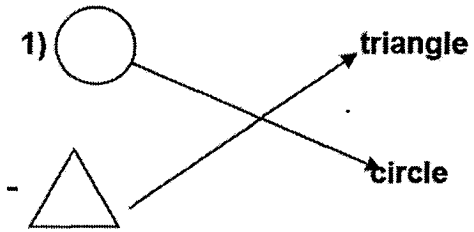


14. How are the shapes grouped?
Put a tick (✓) in the correct box.



By size	
By colour	
By number of sides and vertices	

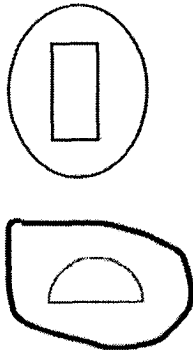
SCHOOL : MAHA BODHI PRIMARY SCHOOL
LEVEL : PRIMARY 1
SUBJECT : MATH
TERM : Review 12022



2)



3)



4)twenty

5)14

6) $6 + 9 = 15$

7) $12 - 5 = 7$

8)13

