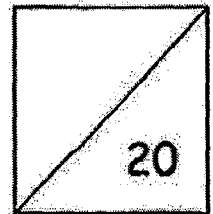




HENRY PARK PRIMARY SCHOOL
MATHEMATICS
PRIMARY 1
TOPICAL QUIZ 1



Numbers to 10, Addition and Subtraction Within 10


Name: _____ () Date: _____

Class: Primary 1 _____ Parent's Signature: _____

Read the questions carefully. Write your answers in the boxes given.

Questions 1 to 12 carry 1 mark each.



1. Count and write the number of muffins in the box.

	
--	--

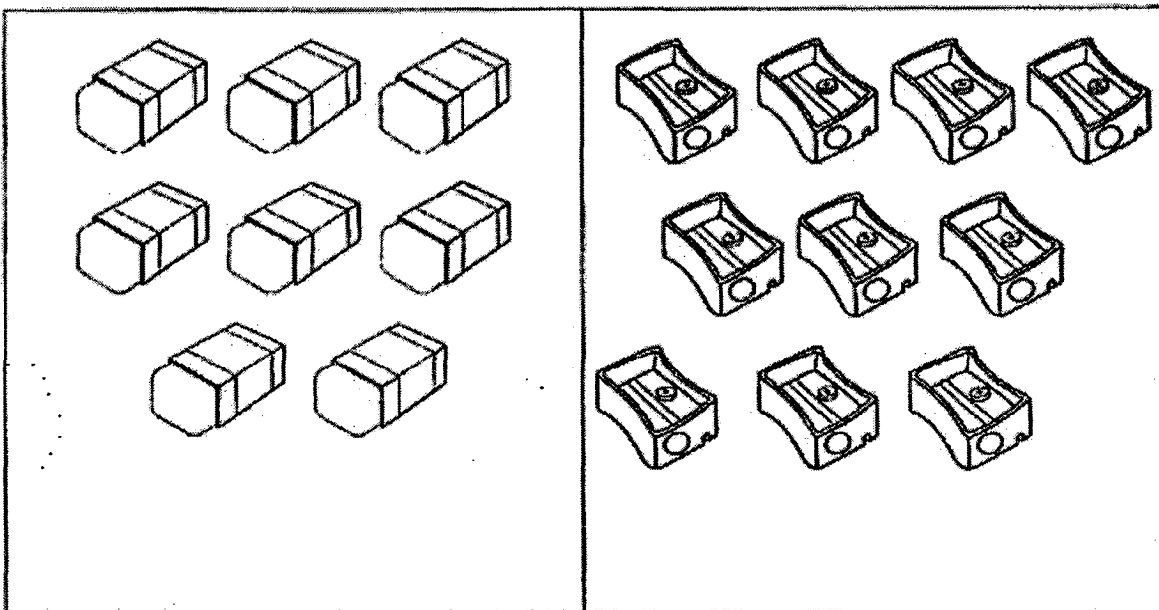
2. Write the number in words.

3	
---	--

3. Tick (✓) the set that has fewer balls. A01


Set A		
Set B		

4. Count and compare. Write the numbers in the boxes.






is greater than

5. Fill in the blank with the correct answer.



$5 + 2 = \underline{\hspace{2cm}}$

6. Use the numbers below to form an addition equation.



+ =

7. $5 + 5 = \square$

8. $\square + 2 = 9$

9. Fill in the blank with the correct answer.






$8 - 3 = \underline{\hspace{2cm}}$

10. Complete the subtraction equation.




$$5 - \square = 2$$

11. Colour the star that has the same answer as 8+2 .



12. Fill in the blanks.



There are fewer stars than hearts.

Questions 13 to 16 carry 2 marks each.

13. Study the number pattern below.

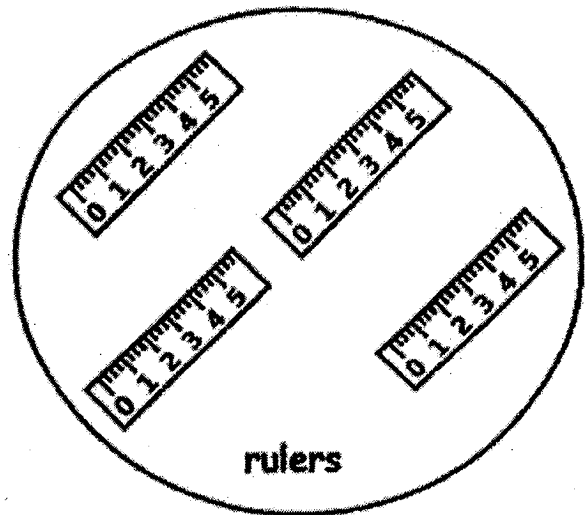



The missing number is .

Read and solve the problem sums. (3 × 2 marks = 6 marks)

Show your equations clearly in the spaces provided.

14. How many more pencils than rulers are there?



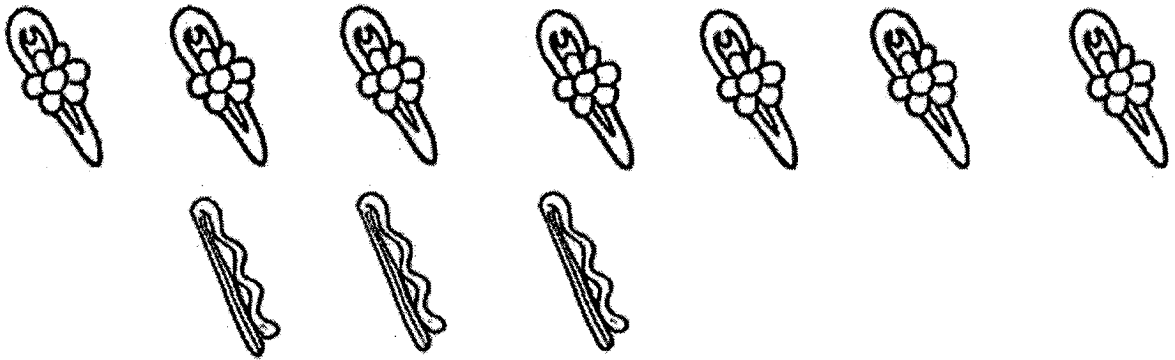
$$\square \quad \bigcirc \quad \square = \square$$

There are more pencils than rulers.

15. Siti has 7 hairclips.

Her aunt gives her 3 more hairclips.

How many hairclips does Siti have in all?



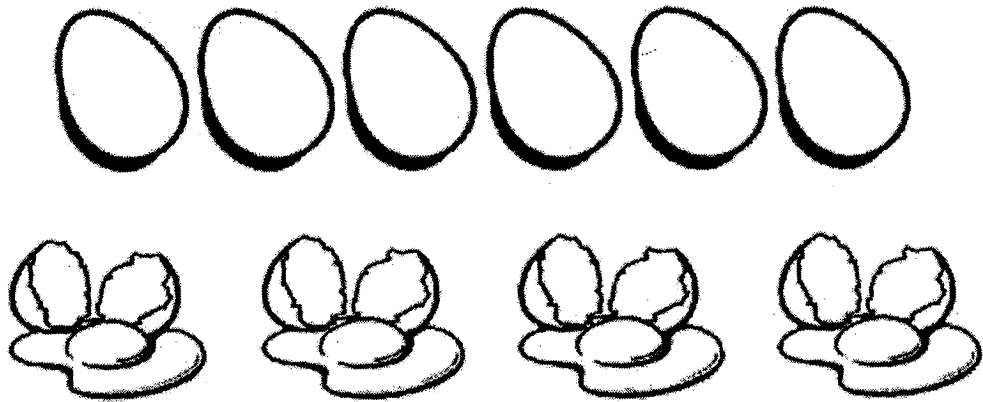
$$\square \quad \bigcirc \quad \square = \square$$

Siti has hairclips in all.

16. Mother bought 10 eggs.

4 of them broke.

How many eggs were not broken?



$$\square \quad \bigcirc \quad \square = \square$$

eggs are not broken.

--- End of Paper ---

Setter : Mdm Noor Azida

SCHOOL : HENRY PARK PRIMARY SCHOOL
LEVEL : PRIMARY 1
SUBJECT : MATH
TERM : Quiz 1 2022

1) 9

2) Three

3) Set A

4) 10 is greater than 8

5) $5 + 2 = 7$

6) $3 + 6 = 9$

7) $5 + 5 = 10$

8) $7 + 2 = 9$

9) $8 - 3 = 5$

10) $5 - 3 = 2$

11) $1 + 9$

12) There are 4 fewer stars than hearts

13) The missing number is 3

14) $6 - 4 = 2$

There are 2 more pencils than rulers.

15) $7 + 3 = 10$

Siti has 10 hairclips in all.

16) $10 - 4 = 6$

6 eggs are not broken.