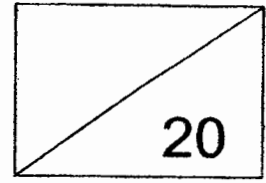


**Red Swastika School**  
**Primary 2 Mathematics**  
**Milestone Check 8**  
**Topic: Time**



Name: \_\_\_\_\_ (    ) Date: \_\_\_\_\_


Class: P2 / \_\_\_\_\_

Duration: 30 minutes

**Part 1**

Choose the correct answer and write its number in the brackets provided. (1 mark each)

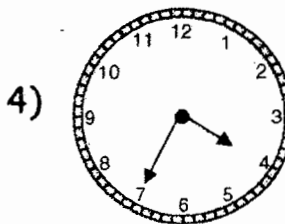
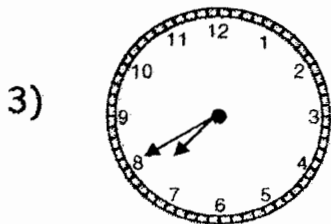
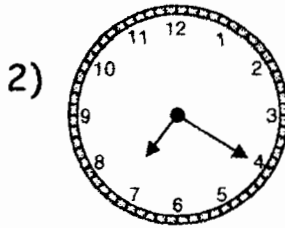
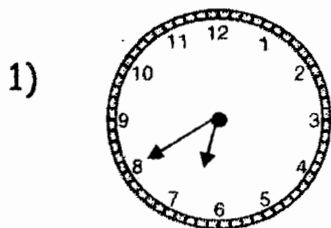
1. What is the time shown on the clock?



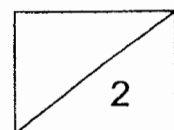
- (1) 4.10
- (2) 4.50
- (3) 5.10
- (4) 10.05

(    )

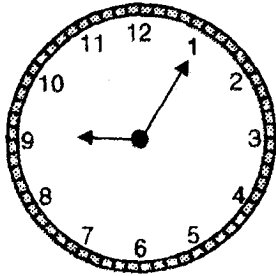
2. Lenny woke up at 7.40. Which clock shows the correct time?



(    )



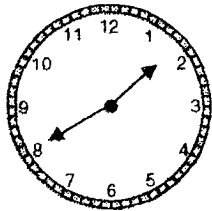
3. Jack reached his office at the time shown below.  
What time did he reach office?



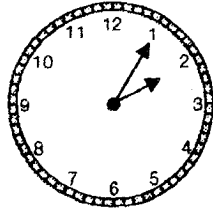
- (1) 1.09
- (2) 1.45
- (3) 9.01
- (4) 9.05

( )

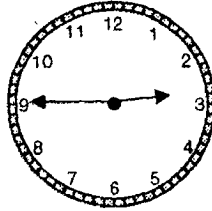
4. Alex, Betty, Cindy and Dan arrived at a party at different times. Who arrived at the party before 2.00?



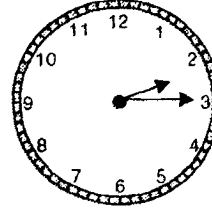
Alex



Betty



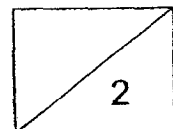
Cindy



Dan

- (1) Alex
- (2) Betty
- (3) Cindy
- (4) Dan

( )



**Part 2**

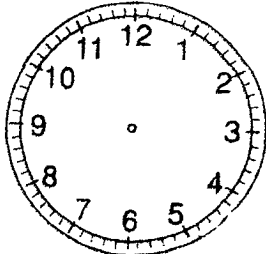
Fill in the blanks with 'a.m.' or 'p.m.' (1 mark each)

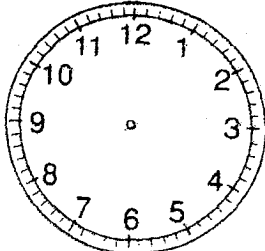
5. Tiffany starts jogging at 7.00 every evening.  
She jogs for half an hour.  
She ends her jog at 7.30 \_\_\_\_\_
6. After breakfast at the hawker centre, Mrs Bala usually does  
her marketing at 8.45 \_\_\_\_\_
7. Weiming went to see the doctor this morning.  
He waited for the clinic to open and the doctor attended to  
him at 9.30 \_\_\_\_\_
8. On Fridays, Martin goes for his badminton CCA at  
2.30 \_\_\_\_\_ after lunch.

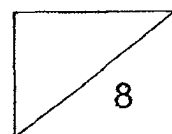
**Part 3**

Draw the hands on each clock face to show the correct time.

(2 marks each)

9.  11.00

10.  3.25

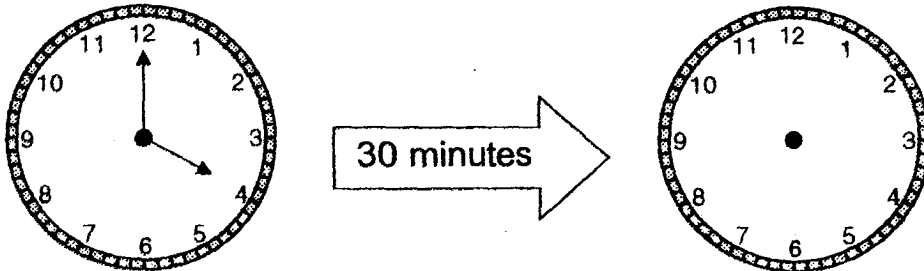


**Part 4**

Solve the following problems.

Fill in the blanks. (2 marks each)

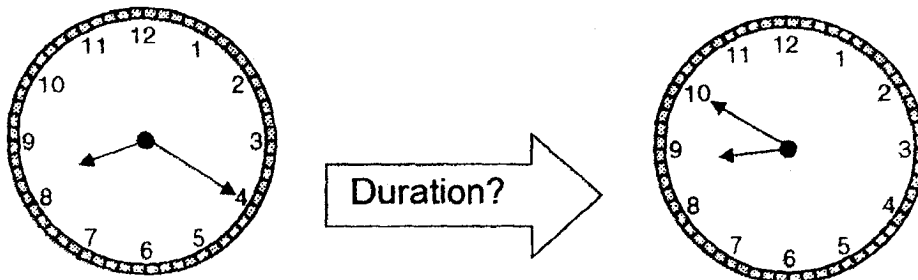
11. May started her piano lesson at 4.00 p.m.  
Her lesson lasted for half an hour.  
What time did her piano lesson end?



Her piano lesson ended at \_\_\_\_\_ p.m.

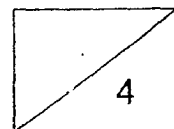
---

12. John cycled from his house to the library.  
He left his house at 8.20 a.m. and reached the library at 8.50 a.m.  
How long did John take to cycle from his house to the library?

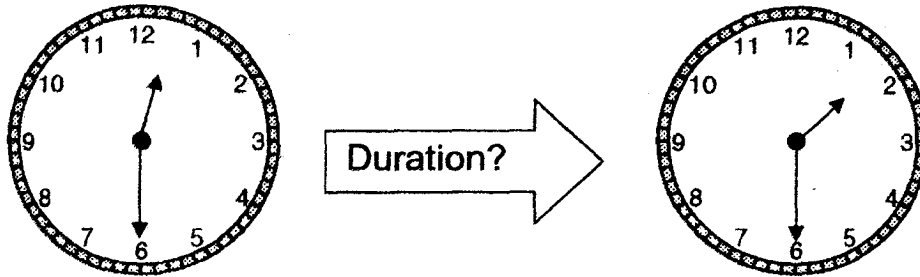


John took \_\_\_\_\_ minutes to cycle from his house to the library.

---



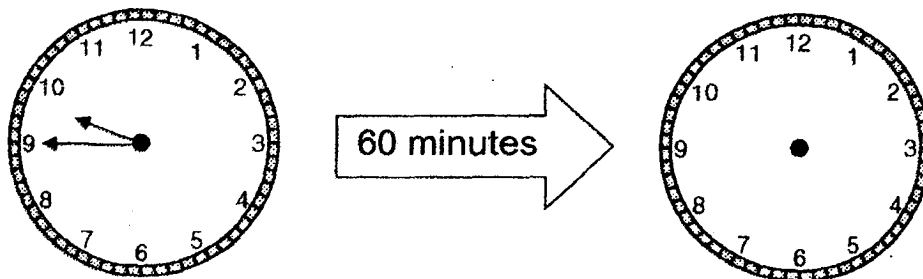
13. Salim's soccer practice starts at 12.30 p.m. and ends at 1.30 p.m.  
How long did his soccer practice last?



His soccer practice lasted for \_\_\_\_\_ hour.

---

14. Mrs Chen started cleaning the house at 9.45 a.m.  
She took an hour to clean the house.  
What time did she finish cleaning the house?

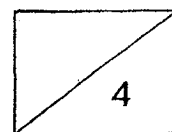





She finished cleaning the house at \_\_\_\_\_ a.m.

---

**End of Paper**


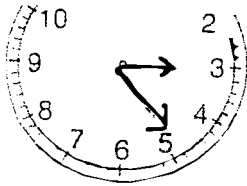
Have you checked your work?



Check	Wow 	Getting there 	A start 
Telling time to 5 minutes Q1, 2, 3, 4			
Writing time using 'a.m.' and 'p.m.' Q5, 6, 7, 8			
Drawing hands on the clock face to show time Q9 and 10			
Duration of one hour/half hour Q11, 12, 13 and 14			

**Milestone Check 8**

Q1	2	Q2	3	Q3	4	Q4	1
----	---	----	---	----	---	----	---

Q5	p.m.	Q6	a.m.
Q7	a.m.	Q8	p.m.
Q9		Q10	
Q11	4.30p.m.	Q12	30
Q13	1	Q14	10.45a.m.