



2021 PRIMARY 1 HOLISTIC ASSESSMENT
MATHEMATICS REVIEW 1

Name: _____ ()

Date: 8 April 2021

Class: Primary 1 ()





Duration: 45 min

Parent's Signature: _____

Marks: _____ / **20**

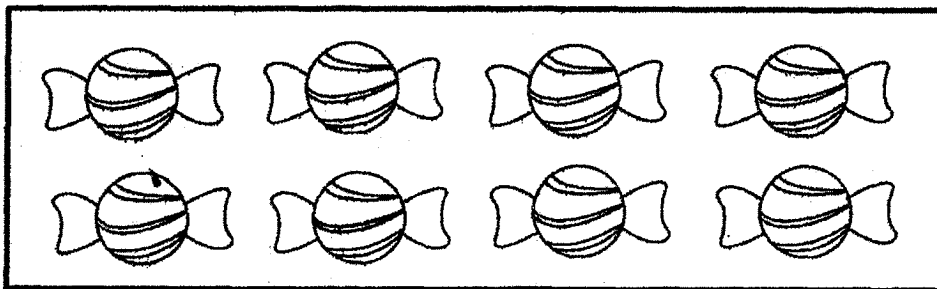
Read the questions carefully.
Write the answer in the space provided.

1. Look at the numbers carefully.




The smallest number is _____.

2. Count and write the number of sweets in **words**.




There are _____ sweets in all.

3. Count and write the correct **number** of cars.




There are _____ cars altogether.

4. Colour **6 ducks**.

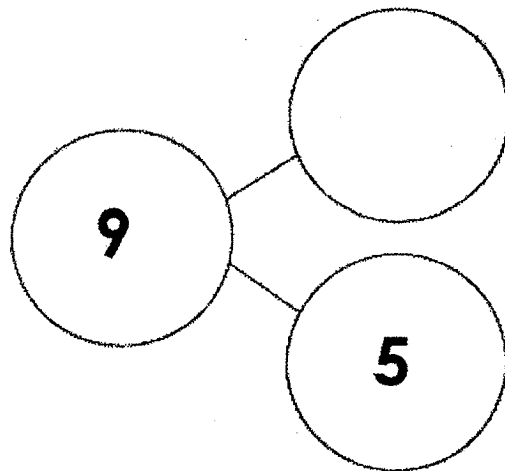


9. Look at the picture.

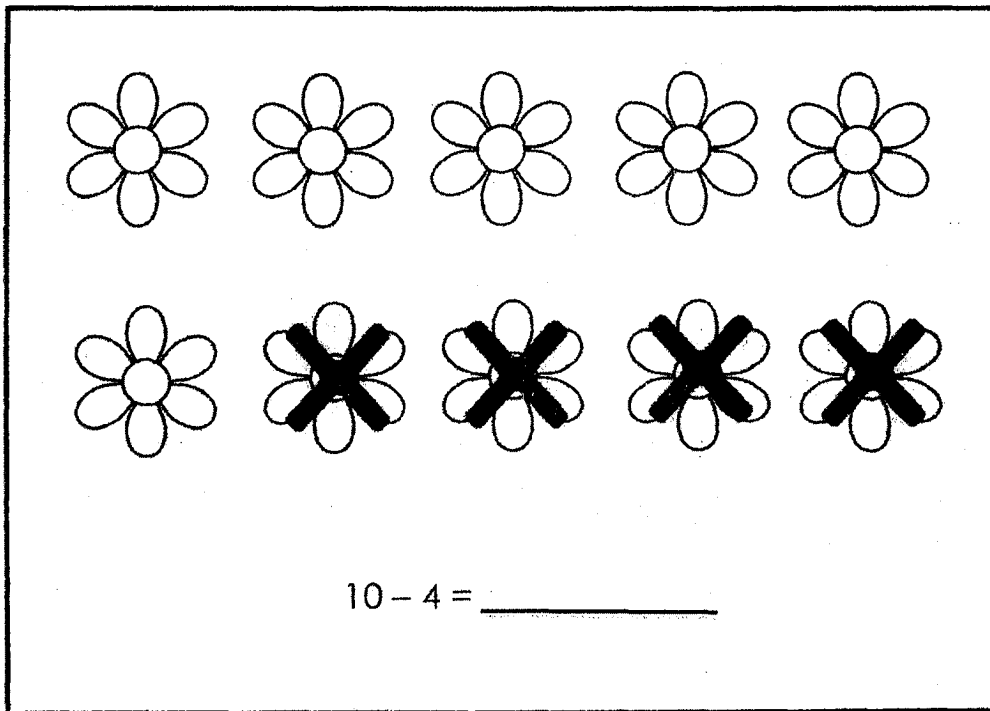
Circle the fifth person from the front of the games stall.



10. Complete the number bond below.



11. Fill in the blank with the correct answer.







10 - 4 = _____

12. Colour two numbers that add up to 10.

3	4	5	7
----------	----------	----------	----------

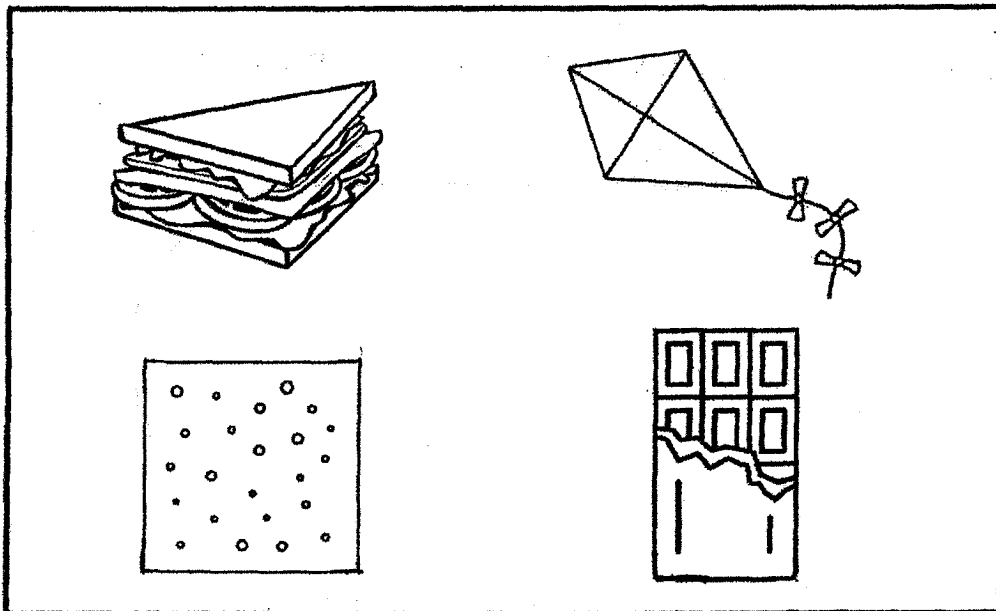
13. Colour the van that gives the answer 8.




14. Look at the objects in the box carefully.

Which object has the shape of a rectangle?

Circle this object.




15. Fill in the blank with 'shape', 'size' or 'colour'.



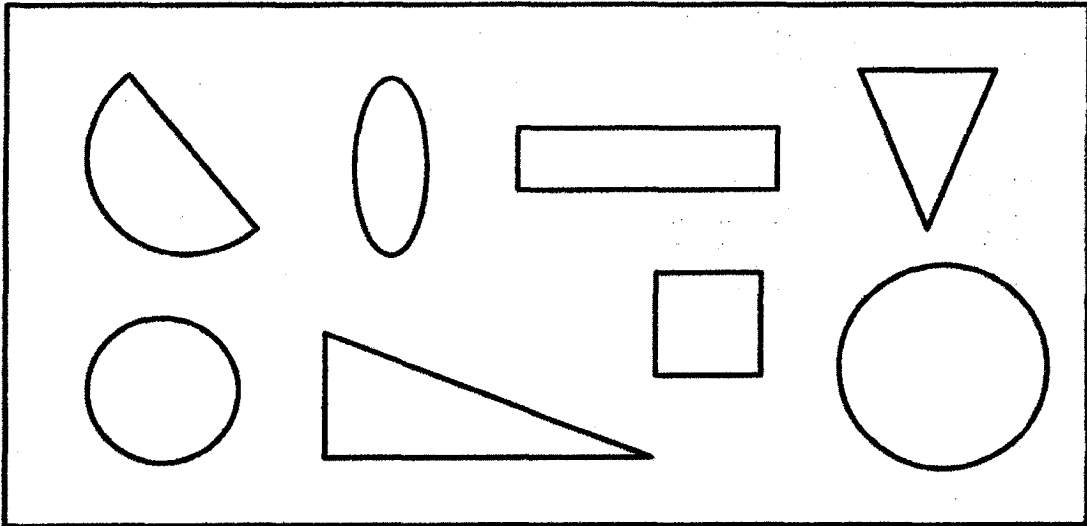
The figures above are grouped according to their _____

16. The figure below is formed by a rectangle, a triangle and a half circle.

Using a ruler, draw lines to show the 3 shapes.




17. Colour all the **circles** below.



18. There are 10 children in the hall.

5 of them are boys.

How many girls are there?



There are _____ girls.

19. John has 2 lollipops.

His father gives him 4 more lollipops.

How many lollipops does John have altogether?

$$\square \bigcirc \square = \square$$

John has _____ lollipops altogether.

20. Mr Lee has 8 pens.

He gives away 5 pens to his pupils.

How many pens does Mr Lee have now?

$$\square \bigcirc \square = \square$$

Mr Lee has _____ pens now.

- End of Paper -



2021 PRIMARY 1 HOLISTIC ASSESSMENT
MATHEMATICS REVIEW 3

Name: _____ ()

Class: Primary 1 ()

Duration: **45 min**


Date: _____

Parent's Signature: _____ Marks: _____ / **20**

Read the questions carefully.

Write your answers in the spaces or boxes provided.

1. Circle the doughnuts to show **groups of 4**.



There are _____ groups of 4.

2. $10 + 10 + 10 = \underline{\hspace{2cm}} \times 10$

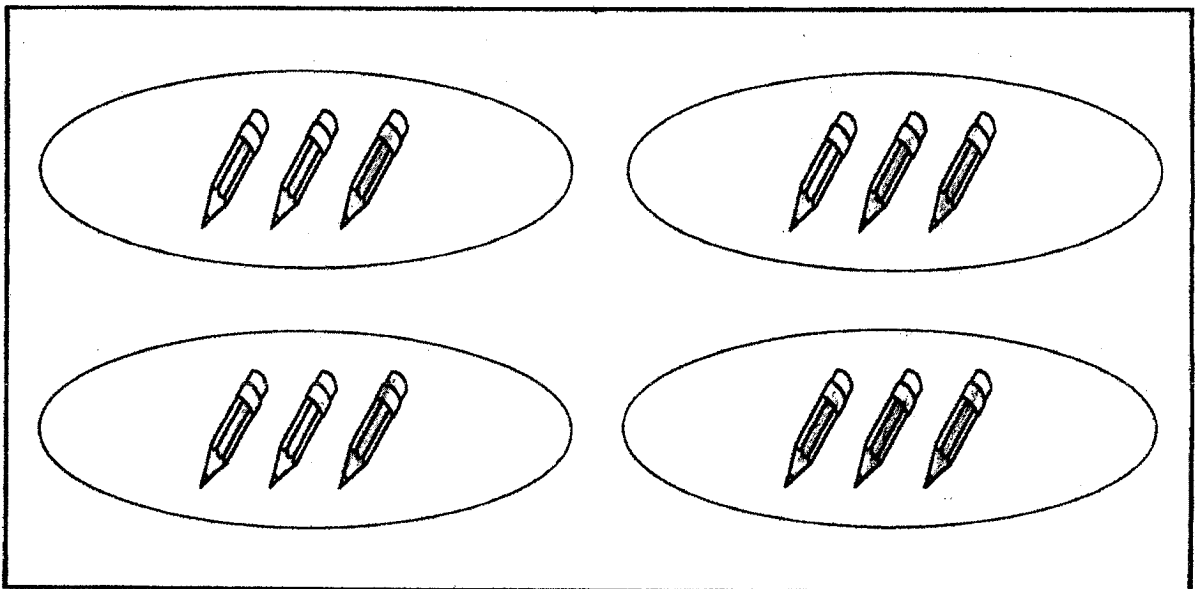
3. Which of the following is the same as 7 twos?
Tick (✓) the correct answer.

$$7 \times 7$$

$$2 \times 2 \times 2 \times 2 \times 2 \times 2 \times 2$$


$$7 \times 2$$

4. Look at the picture below and fill in the blanks.



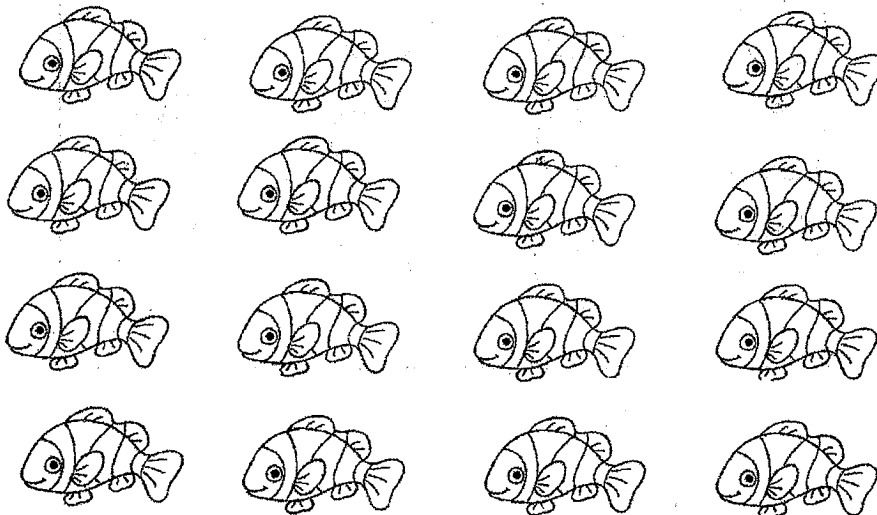
_____ threes = _____

5. What is the time shown on the clock?



The time is _____.


6.




Divide the 16 fish equally into 2 groups.

There are _____ fish in each group

7. Using a ruler, **draw** the hour hand on the clock to show 9 o'clock.




8. Raj gives 5 apples to each of his friends.




Raj has _____ friends.

9. Fill in the blank with **am** or **pm**.




Jacob goes to bed every night at 8:45 _____.

10. Ahmad has 12 soccer balls and 4 tennis balls.
He puts them equally into 4 baskets.



There are _____ balls in each basket

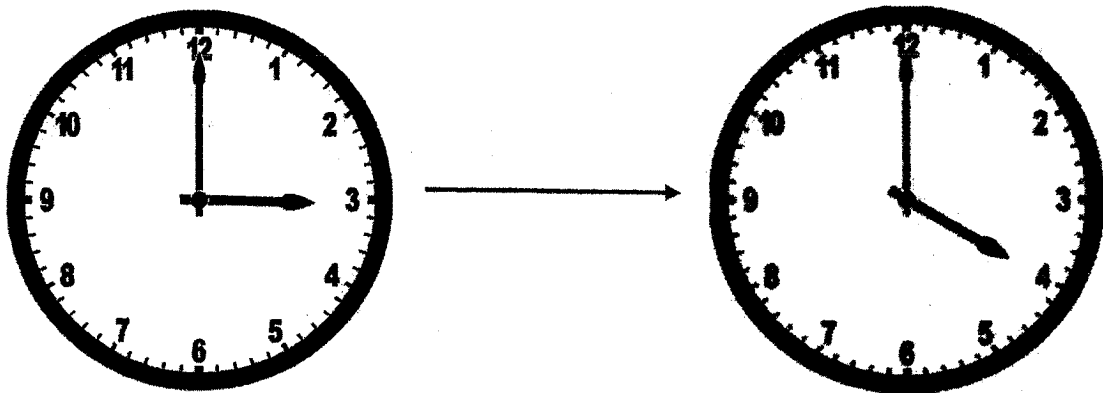
11.



minutes after 8:00 is 8:20.

12. Linda reads a book from 3 pm to 4 pm.

How long does Linda read?



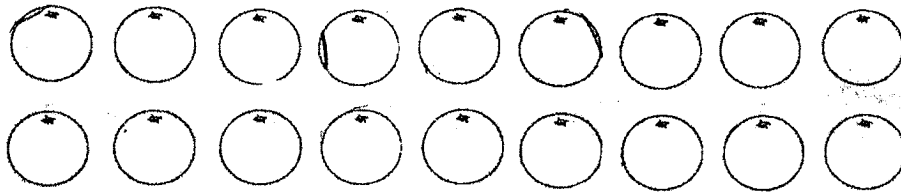
Linda reads for _____.

13. Serene has 18 oranges.

She puts them equally into 3 bags.

How many oranges are there in each bag?

(a) Circle the oranges to show the answer.

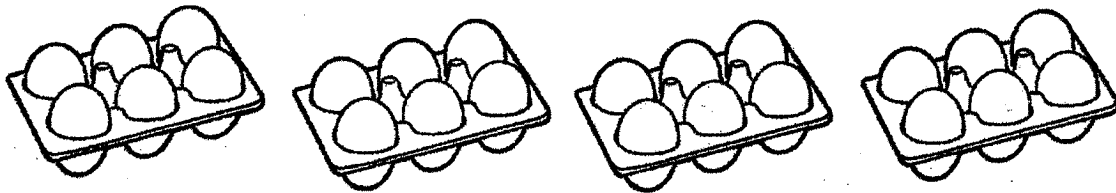


(b) There are _____ oranges in each bag.

14. Mrs Tan buys 4 cartons of eggs.

There are 6 eggs in each carton.

How many eggs does Mrs Tan buy altogether?




$$\square \quad \bigcirc \quad \square = \square$$

Mrs Tan buys _____ eggs.

15. The children at a party share 14 burgers equally.

Each child gets 2 burgers.

(a) Circle the burgers in groups of 2.




(b) How many children are there at the party?

There are _____ children at the party.

16. Susan has 5 boxes.

She puts 5 ribbons in each box.

How many ribbons does Susan have ?






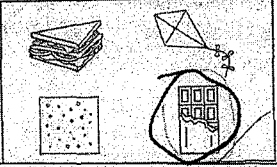

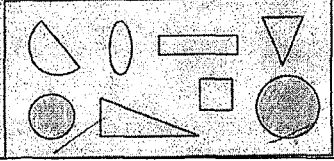
$$\square \quad \bigcirc \quad \square = \square$$

Susan has _____ ribbons altogether.

End of Paper



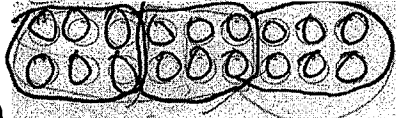

ANSWER KEY

YEAR : 2021
LEVEL : Primary 1
SCHOOL : Tao Nan School
SUBJECT : MATHEMATICS
TERM : Review 1

Q1	9	Q2	eight
Q3	5	Q4	
Q5	20, 10, 12, 2 greatest	Q6	
Q7	2	Q8	$9-3=6$
Q9		Q10	4
Q11	$10-4=6$	Q12	Colour, 3 and 7
Q13	Colour, $5+3$	Q14	
Q15	colour	Q16	
Q17		Q18	$10-5=5$ There are 5 girls.
Q19	$4+2=6$ John has 6 lollipops altogether.	Q20	$8-5=3$ Mr Lee has 3 pens now.

ANSWER KEY

YEAR : 2021
LEVEL : Primary 1
SCHOOL : Tao Nan School
SUBJECT : MATHEMATICS
TERM : Review 3

Q1	 There are 5 groups of 4.	Q2	3
Q3	Tick , 7×2	Q4	$4 \text{ threes} = \underline{12}$
Q5	4 : 15	Q6	8
Q7		Q8	3
Q9	pm	Q10	4
Q11	20	Q12	1 hour
Q13	 (a) (b) 6	Q14	$4 \times 6 = 24$ Mrs Tan buys 24 eggs.
Q15	 (a) (b) 7	Q16	$5 \times 5 = 25$ Susan has 25 ribbons altogether.

000000

111111

222222

333333